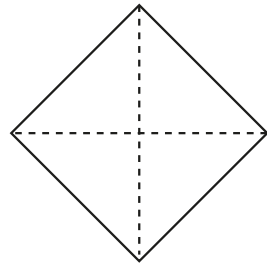
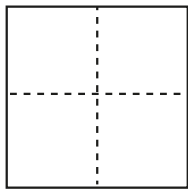
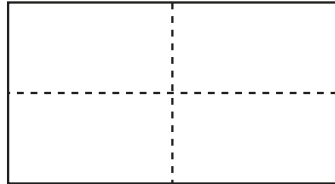
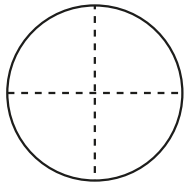







1 Colour a quarter of each shape.



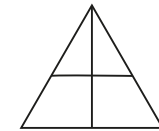
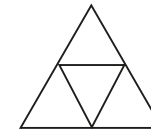
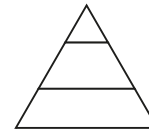
2 Show a quarter in four different ways.



3 Kim wants to show a quarter.



None of these show quarters.



Do you agree with Kim? \_\_\_\_\_

Talk about your answer.



4 Tick the shapes that show one quarter.

